

MATHS  
SAMPLE QUESTION PAPER

Class: IV

Maximum Marks: 50

Time duration: 90 minutes

No of pages:3

---

General Instructions:

All questions are compulsory.

Choose the correct option and write inside the space given

Maintain clean Handwriting, 3m are given for handwriting.

---

1. Give the expand form 4m  
a)8,256      b)98,562      c)4,563      e)7,852
2. Arrange the following in ascending order 4m  
a) 8,798      45687      9875      2456  
b)67,789      89,456      32,456      54,126
3. Round the number to nearest 10 2m  
a)5602      b)9095      c)45,126
4. Add 2m  
a)LXX+XXL    b)XXC+CVI    c)MC+XXM
5. Multiply 3m  
a)229\*8      b)561\*45      c)568\*64
6. 960 people watched the cricket match. There are 20 rows in the stadium. 3m  
a)how many people left early?  
b) How many women were at the match?  
c) How many people in each row?
7. Make a factor tree for number 56 3m
8. Write the fraction for each of the shaded part 3m



Fig a



Fig b



Fig c



Fig d

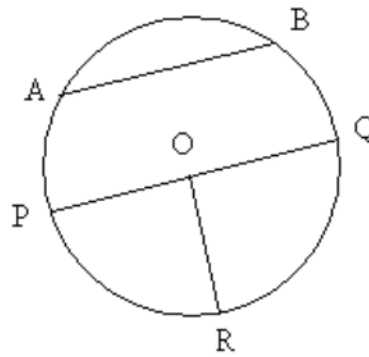
9. Add:

3m

a)  $\frac{3}{10} + \frac{8}{10}$    b)  $\frac{15}{5} + \frac{25}{5}$    c)  $\frac{6}{8} + \frac{23}{8}$

10. Name the parts of the circle

5m



a) center point

b) Diameter

c) Chord

d) Radius

e) OQ

F) OP

11. Draw a line of symmetry for the figure

5m



Fig a



Fig b

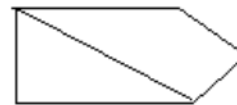


Fig c

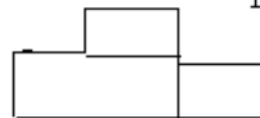


Fig d

12. Find the perimeter of the following

5m



Fig a

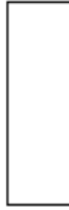


fig b



fig c

13. Use a.m and p.m

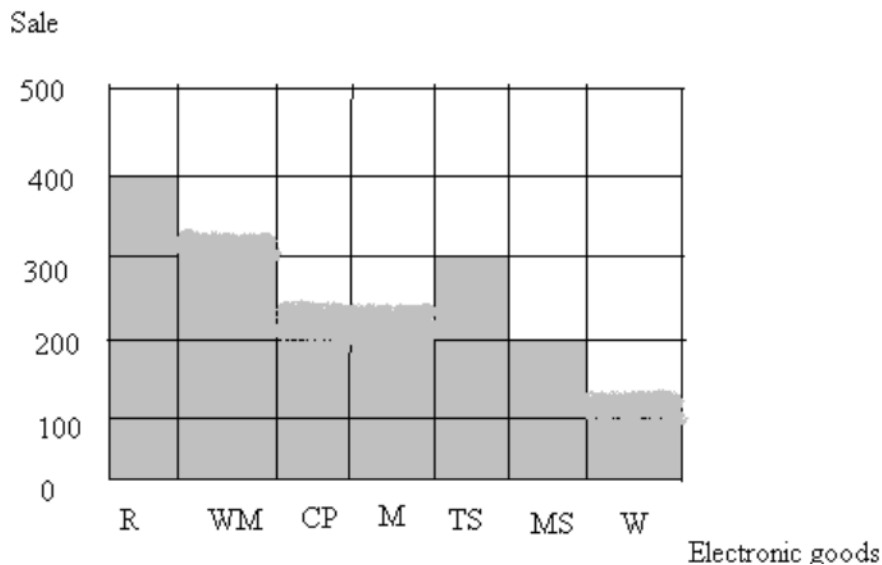
2m

- a) 2 hour before 11.05a.m
- b)3 hours after 10.20 p.m
- c)4 hour before 8.40 a.m

14. The sales figure of a company selling household electronics for May 2004 are given in the following bar graph. Study the bar graph and answer the questions

R- refrigerator, WM- washing Machine, CP- Cordless phones, M- microwaves, Ts – television set,MS- music system, W- Walkman

3m



- a)Which item was sold the most?
- b) How many more television sets were sold than walk mans?
- c) How many less music systems were sold than washing machines?