

**CBSE Sample paper 2016**  
**Subject: Mathematics**  
**Set I**  
**Class: II**

**Time Duration: 60 min.**

**Maximum marks: 45**

**General Instructions:**

**All questions are compulsory.**  
**Choose the correct option and write inside the space given.**  
**Maintain clean Handwriting.**

**I. Fill in the blanks with the correct words. (5)**

1. A triangle has \_\_\_\_\_ sides.
2. 10 more than 85 equals to \_\_\_\_\_.
3.  $3 + 3 + 3 + 3 + 3 = 5 * 3 =$  \_\_\_\_\_.
4. 15 m and 25 cms + 30 m and 50 cms = \_\_\_\_\_.
5. 93 is \_\_\_\_\_ 85

**II. Match the following. (5)**

8 tens and 4	Rs.3.50p
20:40	Three hundred seven
$50p + 50p + 25p + 200p + 25p$	84
307	325
Subtract 328 from 653.	8:40 PM

**III. Fill in the missing numbers. (5)**

1. 28, 30, 32, \_\_\_\_\_, \_\_\_\_\_, \_\_\_\_\_, \_\_\_\_\_, \_\_\_\_\_.

2. 61, 59, 57, \_\_\_\_\_, \_\_\_\_\_, \_\_\_\_\_, \_\_\_\_\_, \_\_\_\_\_.

3. 83, 85, 87 \_\_\_\_\_, \_\_\_\_\_, \_\_\_\_\_, \_\_\_\_\_, \_\_\_\_\_, \_\_\_\_\_.

4. 74, 73, 72, \_\_\_\_\_, \_\_\_\_\_, \_\_\_\_\_, \_\_\_\_\_, \_\_\_\_\_.

5. 40, 44, 48, \_\_\_\_\_, \_\_\_\_\_, \_\_\_\_\_, \_\_\_\_\_, \_\_\_\_\_.

**IV. Write True or False. (5)**

1. 780 come after 779. ( )

2.  $55 + 14 = 14 + 55$ . ( )

3.  $20 * 0 = 20$ . ( )

4.  $99 + 1 = 100$ . ( )

5. 24 is divisible by 1, 2, 3, 4, 6, 8, 12 and 24. ( )

**V. Write the following numbers in increasing order (5)**

1. 9, 1, 4, 7, 8.

2. 4, 2, 6, 1, 5.

3. 7, 4, 6, 5, 3.

4. 4, 0, 2, 9, 8.

5. 8, 1, 5, 7, 6.

**VI. Write the number names for the following numbers. (5)**

1. 9000 - \_\_\_\_\_.

2. 300 - \_\_\_\_\_.

3. 781 - \_\_\_\_\_.

4. 128 - \_\_\_\_\_.

5. 869 - \_\_\_\_\_.

**VII. Encircle and colour the odd numbers. (5)**

22	51	14	71	38
13	22	93	100	77
56	23	50	87	60
81	84	15	66	99
88	53	44	47	30
63	68	99	78	31
40	67	86	95	88
17	96	55	66	89
74	15	70	39	18
41	90	83	26	11

**VIII.**

Choose the correct answer and tick (✓) the things.  
(5)

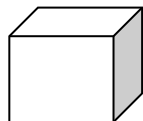
1. Read the clock and select the time?




- a) 6:50.
- b) 10:40.
- c) 10:30.
- d) 6:40.

2. Identify the shapes in the image provided?

- a) Cube.
- b) Triangle.
- c) Rectangle.
- d) Circle.

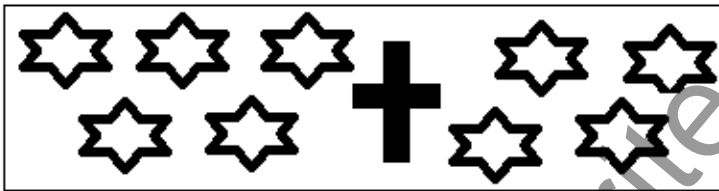


3. Identify the taller animal in the image provided?



- a) Leopard.
- b) Giraffe.
- c) Elephant.
- d) Kangaroo.

4. Add the number of stars and choose the correct number?



- a) 9.
- b) 10.
- c) 8.
- d) 1.

5. John drinks 5 cups of milk every day. How many cups of milk would he be able to drink in 10 days?

- a) 10 cups of milk.
- b) 25 cups of milk.
- c) 15 cups of milk.
- d) 50 cups of milk.

IX. Count how many tens and ones are there in each box and identify the number? (5)

OBJECTS	NO of Tens	NO of Ones	Number
