

CBSE Sample Paper 2016
Subject: Mathematics
Set II
Class: II

Time Duration: 60 min.

Maximum marks: 45

General Instructions:

All questions are compulsory.
Choose the correct option and write inside the space given.
Maintain clean Handwriting.

I. Fill in the blanks with the correct words. (5)

1. Square has _____ sides.
2. _____ is the smallest 2 digit number.
3. 6 kg 100 g + 2 kg 150 g = _____ kg 250 g.
4. $5 * 8 =$ _____.
5. 95 come after _____.

II. Match the following. (5)

9 tens and 0	Rs.107
$8 * 3$	256
Nine hundred ninety two	90
Rs.62 + Rs.45	24
$200+50+6$	992

III. Add the following numbers. (5)

792
+ 141

488
+ 217

215
+ 16

198
+ 25

846
+ 179

246
+ 132





342
+223


346
+ 171

248
+ 66

501
+ 234

IV. Count the objects and write its number and number name.(5)

OBJECTS	NO of Tens	NO of Ones	Number
			
			
			
			



V. Write the following numbers in decreasing order
(5)

1. 5, 8, 6, 4, 9.
2. 1, 9, 2, 7, 4.
3. 1, 0, 2, 4, 8.
4. 5, 9, 10, 4.
5. 8, 11, 21, 31, 41.

VI. Write the place value for the following numbers.
(5)

E.g.: 624 = 6 hundreds + 2 tens + 4 Ones

1. 874 - _____.
2. 210 - _____.
3. 461 - _____.
4. 917 - _____.
5. 246 - _____.

VII. Fill in the missing numbers. (5)

1. 50, _____, 60, _____, 70, _____, _____, 85, _____.
2. _____, 24, 26, _____, 30, _____, _____, 36.
3. 10, 20, _____, _____, 50, _____, _____, _____, 90.
4. 18, _____, 38 _____, _____, 68, _____, 88, _____.
5. _____, 54, _____, _____, _____, _____, 104.

VIII. Write the number names for the following numbers. (5)

1. 187 - _____.
2. 510 - _____.
3. 5000- _____.
4. 437- _____.
5. 935 - _____.

IX. Encircle and colour the even numbers. (5)

31	2	29	26	11
50	5	12	9	10
21	36	49	14	13
30	3	14	39	8
13	72	37	18	1
6	17	4	19	24
33	54	5	30	23
20	87	52	69	90
79	80	27	82	15
70	85	68	83	20